

Name: _____ Class: _____ Date: _____

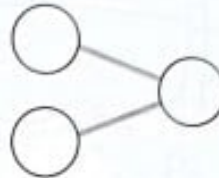
Practice 2 Making Addition Stories


Parent's Signature: _____


Make addition stories.

Complete the number bonds.

1.



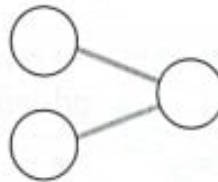
There are _____ .

There are _____ .

$$\square \bigcirc \square = \square$$

There are _____ candles altogether.

2.



There are _____ .

There are _____ .

$$\square \bigcirc \square = \square$$

There are _____ flowers altogether.